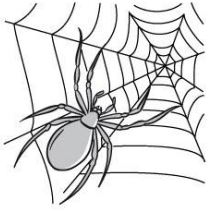


Prénom : _____

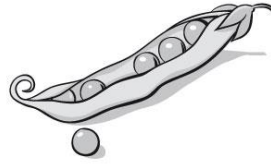
Date : _____

LES LONGUEURS - Quelle est la bonne unité ? (mm - cm)


Colorie l'unité la plus adaptée pour mesurer ce que représente l'image.




mm
cm



mm
cm



mm
cm




mm
cm




mm
cm



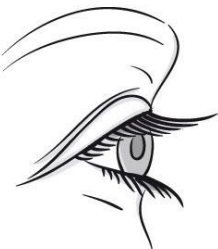
mm
cm



mm
cm



mm
cm



mm
cm



mm
cm



mm
cm



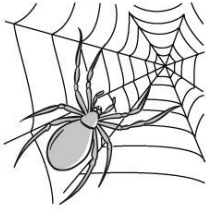
mm
cm

Prénom : _____

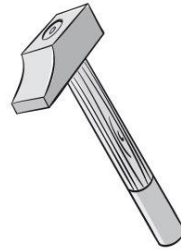
Date : _____

LES LONGUEURS - Quelle est la bonne unité ? (mm - cm)

Colorie l'unité la plus adaptée pour mesurer ce que représente l'image.



mm
cm




mm
cm




mm
cm




mm
cm



mm
cm



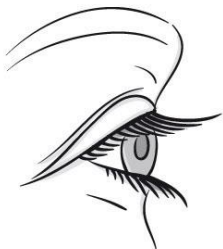
mm
cm



mm
cm



mm
cm



mm
cm



mm
cm



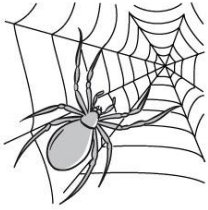
mm
cm



mm
cm

LES LONGUEURS - Quelle est la bonne unité ? (mm - cm - m)

Colorie l'unité la plus adaptée pour mesurer ce que représente l'image.



mm

cm

m



mm

cm


m



mm

cm

m



mm

cm

m



mm

cm

m



mm

cm

m



mm

cm

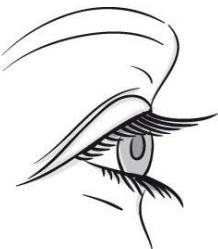
m



mm

cm


m



mm

cm

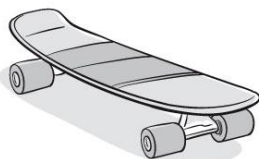
m



mm

cm

m



mm

cm

m



mm

cm













m

Prénom : _____

Date : _____

LES LONGUEURS - Quelle est la bonne unité ? (mm - cm - m)

Colorie l'unité la plus adaptée pour mesurer ce que représente l'image.

	<p>mm</p> <p>cm</p> <p>m</p>		<p>mm</p> <p>cm</p> <p>m</p>
	<p>mm</p> <p>cm</p> <p>m</p>		<p>mm</p> <p>cm</p> <p>m</p>
	<p>mm</p> <p>cm</p> <p>m</p>		<p>mm</p> <p>cm</p> <p>m</p>
	<p>mm</p> <p>cm</p> <p>m</p>		<p>mm</p> <p>cm</p> <p>m</p>
	<p>mm</p> <p>cm</p> <p>m</p>		<p>mm</p> <p>cm</p> <p>m</p>
	<p>mm</p> <p>cm</p> <p>m</p>		<p>mm</p> <p>cm</p> <p>m</p>



Prénom : _____

Date : _____

LES LONGUEURS - Quelle est la bonne unité ? (mm - cm - dm - m)


Colorie l'unité la plus adaptée pour mesurer ce que représente l'image.



- mm
- cm
- dm
- m




- mm
- cm
- dm
- m



- mm
- cm
- dm
- m



- mm
- cm
- dm
- m



- mm
- cm
- dm
- m



- mm
- cm
- dm
- m



- mm
- cm
- dm
- m




- mm
- cm
- dm
- m



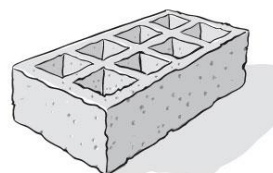
- mm
- cm
- dm
- m



- mm
- cm
- dm
- m



- mm
- cm
- dm
- m













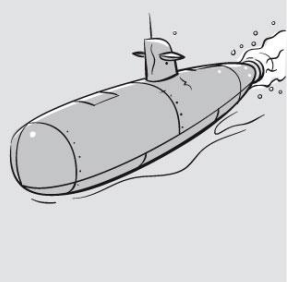

- mm
- cm
- dm
- m

Prénom : _____

Date : _____

LES LONGUEURS - Quelle est la bonne unité ? (mm - cm - dm - m)


Colorie l'unité la plus adaptée pour mesurer ce que représente l'image.

	<ul style="list-style-type: none">mmcmdmm		<ul style="list-style-type: none">mmcmdmm
	<ul style="list-style-type: none">mmcmdmm		<ul style="list-style-type: none">mmcmdmm
	<ul style="list-style-type: none">mmcmdmm		<ul style="list-style-type: none">mmcmdmm
	<ul style="list-style-type: none">mmcmdmm		<ul style="list-style-type: none">mmcmdmm
	<ul style="list-style-type: none">mmcmdmm		<ul style="list-style-type: none">mmcmdmm
	<ul style="list-style-type: none">mmcmdmm		<ul style="list-style-type: none">mmcmdmm



LES LONGUEURS - Quelle est la bonne unité ? (mm - m - km)

Colorie l'unité la plus adaptée pour mesurer ce que représente l'image.



mm

m


km



mm

m

km



mm

m


km



mm

m

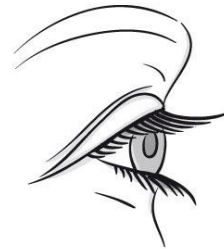
km



mm

m

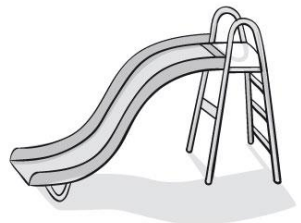
km



mm

m

km



mm

m

km



mm

m


km



mm

m


km



mm

m


km



mm

m

km












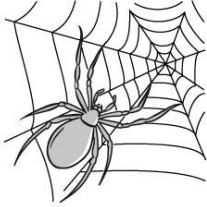
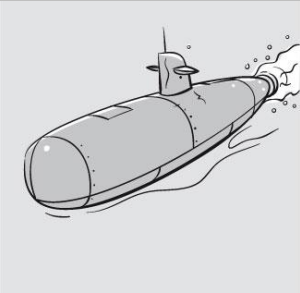

mm

m

km


LES LONGUEURS - Quelle est la bonne unité ? (mm - m - km)

Colorie l'unité la plus adaptée pour mesurer ce que représente l'image.

	<div style="border: 1px solid black; padding: 2px; text-align: center;">mm</div> <div style="border: 1px solid black; padding: 2px; text-align: center;">m</div> <div style="border: 1px solid black; padding: 2px; text-align: center;">km</div>		<div style="border: 1px solid black; padding: 2px; text-align: center;">mm</div> <div style="border: 1px solid black; padding: 2px; text-align: center;">m</div> <div style="border: 1px solid black; padding: 2px; text-align: center;">km</div>
	<div style="border: 1px solid black; padding: 2px; text-align: center;">mm</div> <div style="border: 1px solid black; padding: 2px; text-align: center;">m</div> <div style="border: 1px solid black; padding: 2px; text-align: center;">km</div>		<div style="border: 1px solid black; padding: 2px; text-align: center;">mm</div> <div style="border: 1px solid black; padding: 2px; text-align: center;">m</div> <div style="border: 1px solid black; padding: 2px; text-align: center;">km</div>
	<div style="border: 1px solid black; padding: 2px; text-align: center;">mm</div> <div style="border: 1px solid black; padding: 2px; text-align: center;">m</div> <div style="border: 1px solid black; padding: 2px; text-align: center;">km</div>		<div style="border: 1px solid black; padding: 2px; text-align: center;">mm</div> <div style="border: 1px solid black; padding: 2px; text-align: center;">m</div> <div style="border: 1px solid black; padding: 2px; text-align: center;">km</div>
	<div style="border: 1px solid black; padding: 2px; text-align: center;">mm</div> <div style="border: 1px solid black; padding: 2px; text-align: center;">m</div> <div style="border: 1px solid black; padding: 2px; text-align: center;">km</div>		<div style="border: 1px solid black; padding: 2px; text-align: center;">mm</div> <div style="border: 1px solid black; padding: 2px; text-align: center;">m</div> <div style="border: 1px solid black; padding: 2px; text-align: center;">km</div>
	<div style="border: 1px solid black; padding: 2px; text-align: center;">mm</div> <div style="border: 1px solid black; padding: 2px; text-align: center;">m</div> <div style="border: 1px solid black; padding: 2px; text-align: center;">km</div>		<div style="border: 1px solid black; padding: 2px; text-align: center;">mm</div> <div style="border: 1px solid black; padding: 2px; text-align: center;">m</div> <div style="border: 1px solid black; padding: 2px; text-align: center;">km</div>
	<div style="border: 1px solid black; padding: 2px; text-align: center;">mm</div> <div style="border: 1px solid black; padding: 2px; text-align: center;">m</div> <div style="border: 1px solid black; padding: 2px; text-align: center;">km</div>		<div style="border: 1px solid black; padding: 2px; text-align: center;">mm</div> <div style="border: 1px solid black; padding: 2px; text-align: center;">m</div> <div style="border: 1px solid black; padding: 2px; text-align: center;">km</div>

LES LONGUEURS - Quelle est la bonne unité ? (mm - cm - dm - m - dam - hm - km)


Colorie l'unité la plus adaptée pour mesurer ce que représente l'image.



mm	dam
cm	hm
dm	km
m	




mm	dam
cm	hm
dm	km
m	



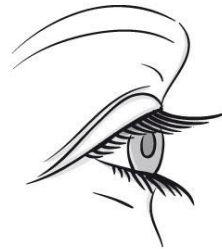
mm	dam
cm	hm
dm	km
m	



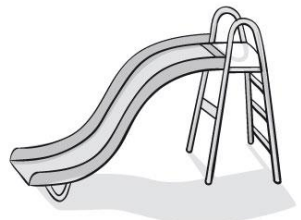
mm	dam
cm	hm
dm	km
m	



mm	dam
cm	hm
dm	km
m	




mm	dam
cm	hm
dm	km
m	



mm	dam
cm	hm
dm	km
m	



mm	dam
cm	hm
dm	km
m	



mm	dam
cm	hm
dm	km
m	



mm	dam
cm	hm
dm	km
m	








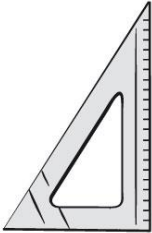




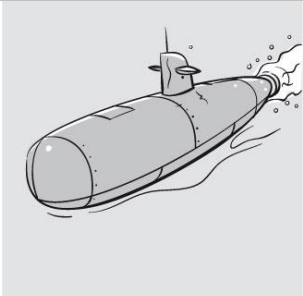

mm	dam
cm	hm
dm	km
m	



mm	dam
cm	hm
dm	km
m	

LES LONGUEURS - Quelle est la bonne unité ? (mm - cm - dm - m - dam - hm - km)

Colorie l'unité la plus adaptée pour mesurer ce que représente l'image.

	<table border="1"> <tr><td>mm</td><td>dam</td></tr> <tr><td>cm</td><td>hm</td></tr> <tr><td>dm</td><td>km</td></tr> <tr><td>m</td><td></td></tr> </table>	mm	dam	cm	hm	dm	km	m			<table border="1"> <tr><td>mm</td><td>dam</td></tr> <tr><td>cm</td><td>hm</td></tr> <tr><td>dm</td><td>km</td></tr> <tr><td>m</td><td></td></tr> </table>	mm	dam	cm	hm	dm	km	m	
mm	dam																		
cm	hm																		
dm	km																		
m																			
mm	dam																		
cm	hm																		
dm	km																		
m																			
	<table border="1"> <tr><td>mm</td><td>dam</td></tr> <tr><td>cm</td><td>hm</td></tr> <tr><td>dm</td><td>km</td></tr> <tr><td>m</td><td></td></tr> </table>	mm	dam	cm	hm	dm	km	m			<table border="1"> <tr><td>mm</td><td>dam</td></tr> <tr><td>cm</td><td>hm</td></tr> <tr><td>dm</td><td>km</td></tr> <tr><td>m</td><td></td></tr> </table>	mm	dam	cm	hm	dm	km	m	
mm	dam																		
cm	hm																		
dm	km																		
m																			
mm	dam																		
cm	hm																		
dm	km																		
m																			
	<table border="1"> <tr><td>mm</td><td>dam</td></tr> <tr><td>cm</td><td>hm</td></tr> <tr><td>dm</td><td>km</td></tr> <tr><td>m</td><td></td></tr> </table>	mm	dam	cm	hm	dm	km	m			<table border="1"> <tr><td>mm</td><td>dam</td></tr> <tr><td>cm</td><td>hm</td></tr> <tr><td>dm</td><td>km</td></tr> <tr><td>m</td><td></td></tr> </table>	mm	dam	cm	hm	dm	km	m	
mm	dam																		
cm	hm																		
dm	km																		
m																			
mm	dam																		
cm	hm																		
dm	km																		
m																			
	<table border="1"> <tr><td>mm</td><td>dam</td></tr> <tr><td>cm</td><td>hm</td></tr> <tr><td>dm</td><td>km</td></tr> <tr><td>m</td><td></td></tr> </table>	mm	dam	cm	hm	dm	km	m			<table border="1"> <tr><td>mm</td><td>dam</td></tr> <tr><td>cm</td><td>hm</td></tr> <tr><td>dm</td><td>km</td></tr> <tr><td>m</td><td></td></tr> </table>	mm	dam	cm	hm	dm	km	m	
mm	dam																		
cm	hm																		
dm	km																		
m																			
mm	dam																		
cm	hm																		
dm	km																		
m																			
	<table border="1"> <tr><td>mm</td><td>dam</td></tr> <tr><td>cm</td><td>hm</td></tr> <tr><td>dm</td><td>km</td></tr> <tr><td>m</td><td></td></tr> </table>	mm	dam	cm	hm	dm	km	m			<table border="1"> <tr><td>mm</td><td>dam</td></tr> <tr><td>cm</td><td>hm</td></tr> <tr><td>dm</td><td>km</td></tr> <tr><td>m</td><td></td></tr> </table>	mm	dam	cm	hm	dm	km	m	
mm	dam																		
cm	hm																		
dm	km																		
m																			
mm	dam																		
cm	hm																		
dm	km																		
m																			
	<table border="1"> <tr><td>mm</td><td>dam</td></tr> <tr><td>cm</td><td>hm</td></tr> <tr><td>dm</td><td>km</td></tr> <tr><td>m</td><td></td></tr> </table>	mm	dam	cm	hm	dm	km	m			<table border="1"> <tr><td>mm</td><td>dam</td></tr> <tr><td>cm</td><td>hm</td></tr> <tr><td>dm</td><td>km</td></tr> <tr><td>m</td><td></td></tr> </table>	mm	dam	cm	hm	dm	km	m	
mm	dam																		
cm	hm																		
dm	km																		
m																			
mm	dam																		
cm	hm																		
dm	km																		
m																			